

Name : _____ Date : _____

FLAG DAY NUMBER PUZZLE





Find the value of each symbol. Each symbol has the same value across equations.

1.  **x**  = 25

2. 25 -  = 

3.  :  = 

4.  +  = 

	=		=
	=		=