


Name: _____

Date: _____

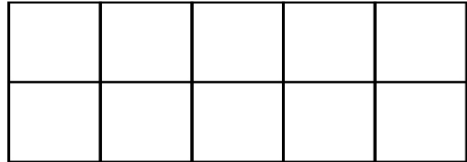


Color the parts of each shape corresponding to the given fraction.

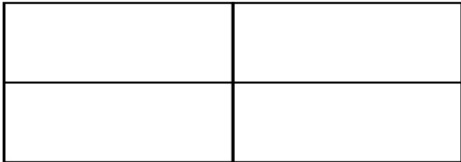
$$\frac{2}{6}$$



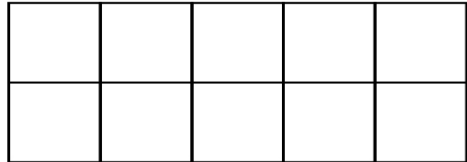
$$\frac{6}{10}$$



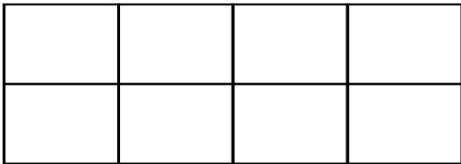
$$\frac{1}{4}$$



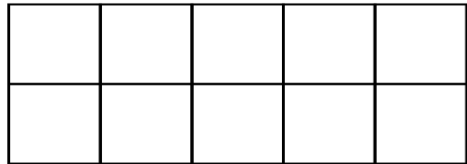
$$\frac{1}{10}$$



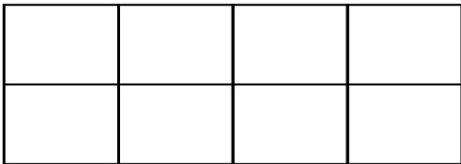
$$\frac{3}{8}$$



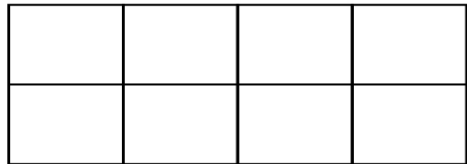
$$\frac{4}{10}$$




$$\frac{2}{8}$$



$$\frac{5}{8}$$



$$\frac{4}{6}$$



$$\frac{2}{8}$$

