

Name : _____ Date : _____

FRACTIONS PRACTICE

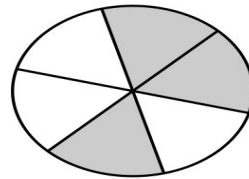
Look at the shaded parts of each circle.
Circle the correct fraction from the options on the left that matches the picture.

$\frac{3}{7}$

$\frac{2}{5}$

$\frac{3}{6}$

$\frac{2}{3}$

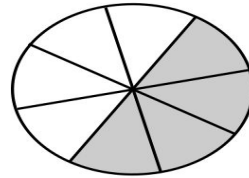


$\frac{4}{7}$

$\frac{4}{5}$

$\frac{4}{8}$

$\frac{4}{6}$

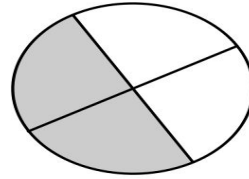


$\frac{3}{5}$

$\frac{1}{2}$

$\frac{2}{4}$

$\frac{2}{6}$



$\frac{2}{3}$

$\frac{2}{4}$

$\frac{2}{6}$

$\frac{2}{5}$

