





Name: _____



Date: _____

Christmas Math Worksheet

Count the images. Write the number of images in the boxes above each image and write the total number in the last box.

<div></div>	+	<div></div>	=	<div></div>
				

<div></div>	+	<div></div>	=	<div></div>
				

<div></div>	-	<div></div>	=	<div></div>
				

<div></div>	-	<div></div>	=	<div></div>
