










Name: \_\_\_\_\_

Date: \_\_\_\_\_

# VALENTINE'S DAY PUZZLE:

## Addition and Subtraction Within 20

Find the value of each picture. Each picture has the same value across equations.

1.  + 5 = 15
2. 19 -  = 
3.  +  = 
4.  -  = 

Write the value of each picture.

	=	_____		=	_____
	=	_____		=	_____