

Name: \_\_\_\_\_

Date: \_\_\_\_\_

# CHRISTMAS MATH PUZZLE:

## Addition and Subtraction Within 20

Find the value of each picture. Each picture has the same value across equations.


1.  + 5 = 17

2. 18 -  = 


3.  +  = 


4.  -  = 

Write the value of each picture.

 = \_\_\_\_\_

 = \_\_\_\_\_

 = \_\_\_\_\_

 = \_\_\_\_\_