





Name: _____

Telling time: on the quarter hour

Directions: For each clock, write the time below it in digital form. e.g. 3:15.

 <p>Time is: _____ : _____</p>	 <p>Time is: _____ : _____</p>
 <p>Time is: _____ : _____</p>	 <p>Time is: _____ : _____</p>