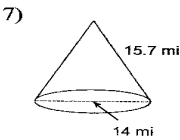
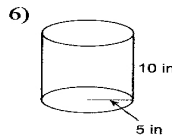
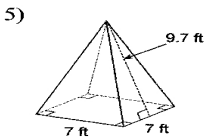
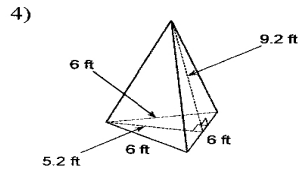
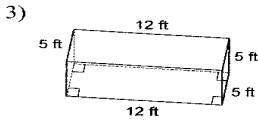
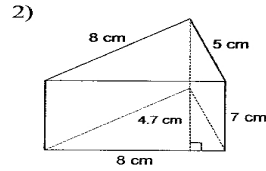
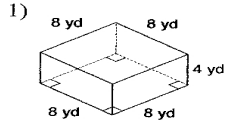


Surface Area & Volume Review

Find the lateral area of each figure. Round your answers to the nearest tenth, if necessary.



Find the surface area of each figure. Round your answers to the nearest tenth, if necessary.

