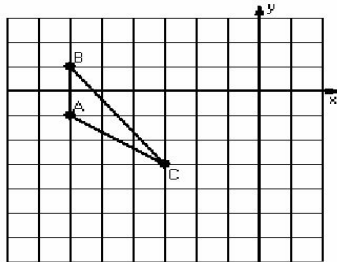


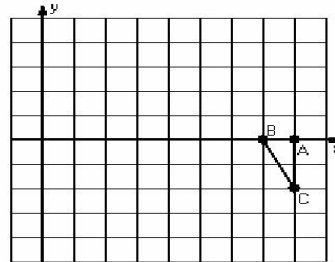
Reflections (J)

Instructions: Draw and label the reflected image for each triangle.
Draw the reflection line.

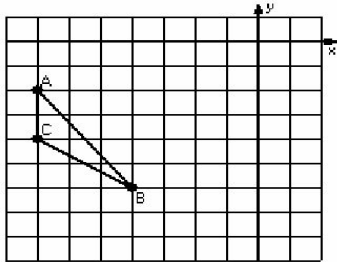
1) Reflection $x = -4$



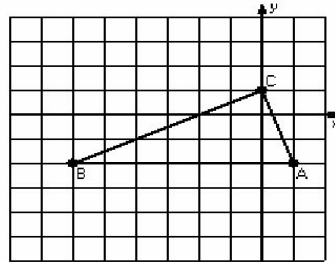
2) Reflection $y = 1$



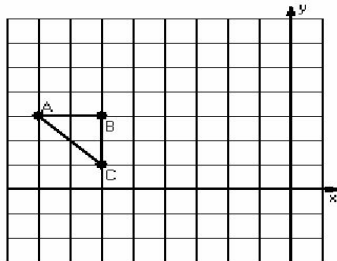
3) Reflection $x = -3$



4) Reflection $y = 0$



5) Reflection $x = -5$



6) Reflection $y = -3$

