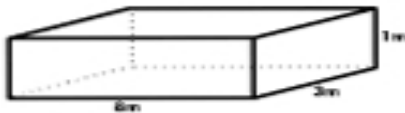


## Volume & Capacity

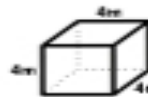
Name: \_\_\_\_\_

Find the volume of cubes and rectangular prisms  
by multiplying the length by the width by the height.  $V = l \times w \times h$



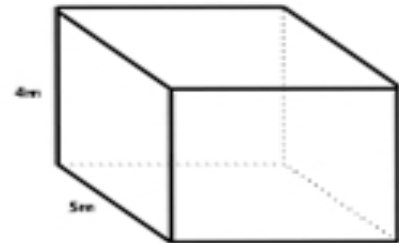
$$V = \underline{\quad} \times \underline{\quad} \times \underline{\quad}$$

$$= \underline{\quad} \text{ m}^3$$



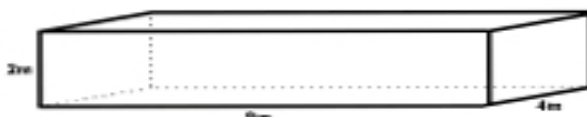
$$V = \underline{\quad} \times \underline{\quad} \times \underline{\quad}$$

$$= \underline{\quad} \text{ m}^3$$



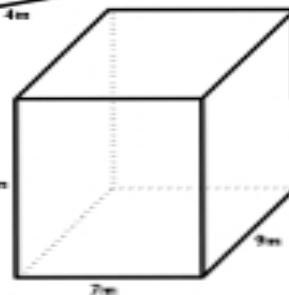
$$V = \underline{\quad} \times \underline{\quad} \times \underline{\quad}$$

$$= \underline{\quad} \text{ m}^3$$



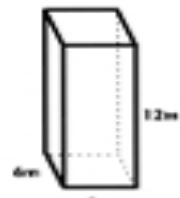
$$V = \underline{\quad} \times \underline{\quad} \times \underline{\quad}$$

$$= \underline{\quad} \text{ m}^3$$



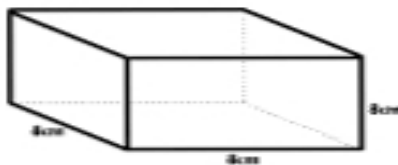
$$V = \underline{\quad} \times \underline{\quad} \times \underline{\quad}$$

$$= \underline{\quad} \text{ m}^3$$



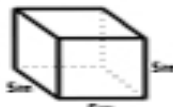
$$V = \underline{\quad} \times \underline{\quad} \times \underline{\quad}$$

$$= \underline{\quad} \text{ m}^3$$



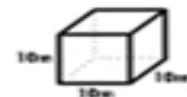
$$V = \underline{\quad} \times \underline{\quad} \times \underline{\quad}$$

$$= \underline{\quad} \text{ m}^3$$



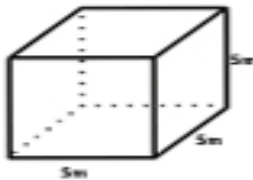
$$V = \underline{\quad} \times \underline{\quad} \times \underline{\quad}$$

$$= \underline{\quad} \text{ m}^3$$



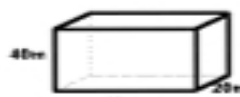
$$V = \underline{\quad} \times \underline{\quad} \times \underline{\quad}$$

$$= \underline{\quad} \text{ m}^3$$



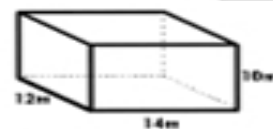
$$V = \underline{\quad} \times \underline{\quad} \times \underline{\quad}$$

$$= \underline{\quad} \text{ m}^3$$



$$V = \underline{\quad} \times \underline{\quad} \times \underline{\quad}$$

$$= \underline{\quad} \text{ m}^3$$



$$V = \underline{\quad} \times \underline{\quad} \times \underline{\quad}$$

$$= \underline{\quad} \text{ m}^3$$