

Score

6

01-01-03-001-s

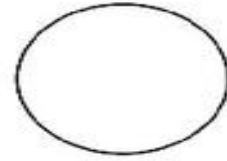
Name: _____
Date: _____

Subject: Year 1 Numeracy
Unit: Naming shapes

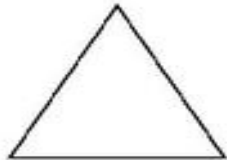
Name the following shapes.



This is a _____



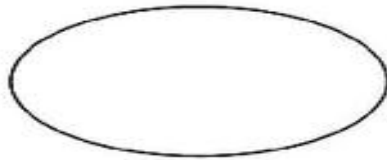
This is a _____



This is a _____



This is a _____



This is an _____



This is a _____