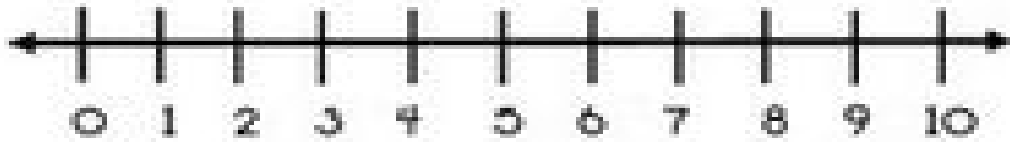






















Name: _____



Use the number line to find the missing addends.

- | | |
|--|--|
| 1.  + 4 = 9 | 11.  + 2 = 8 |
| 2.  + 3 = 8 | 12.  + 5 = 8 |
| 3.  + 2 = 7 | 13.  + 2 = 10 |
| 4.  + 4 = 10 | 14.  + 3 = 10 |
| 5.  + 3 = 7 | 15.  + 1 = 7 |
| 6.  + 3 = 9 | 16.  + 4 = 7 |
| 7.  + 8 = 10 | 17.  + 3 = 6 |
| 8.  + 2 = 6 | 18.  + 3 = 4 |
| 9.  + 4 = 8 | 19.  + 2 = 8 |
| 10.  + 5 = 10 | 20.  + 1 = 10 |