




























Greater than, Less than, or Equal to



Uh-oh! I forgot to finish comparing how many carrots were eaten. Can you make each of these statements true, by writing the correct number in the box?

<p>Cupid</p>  <p>84</p>	<p>Dasher</p>  <p><input type="text"/></p>	<p>Vixen</p>  <p><input type="text"/></p>	<p>Blitzen</p>  <p>15</p>	<p>Rudolph</p>  <p>33</p>	<p>Comet</p>  <p><input type="text"/></p>
<p>Dasher</p>  <p><input type="text"/></p>	<p>Vixen</p>  <p>62</p>	<p>Rudolph</p>  <p><input type="text"/></p>	<p>Dasher</p>  <p>50</p>	<p>Dasher</p>  <p><input type="text"/></p>	<p>Vixen</p>  <p>21</p>
<p>Dasher</p>  <p>31</p>	<p>Cupid</p>  <p><input type="text"/></p>	<p>Comet</p>  <p><input type="text"/></p>	<p>Blitzen</p>  <p>23</p>	<p>Dasher</p>  <p>61</p>	<p>Comet</p>  <p><input type="text"/></p>
<p>Blitzen</p>  <p><input type="text"/></p>	<p>Comet</p>  <p>55</p>	<p>Dasher</p>  <p>10</p>	<p>Rudolph</p>  <p><input type="text"/></p>	<p>Blitzen</p>  <p><input type="text"/></p>	<p>Cupid</p>  <p>14</p>