

Name _____

..... **Zero in on the Order**



Write the sums.

$$\begin{array}{r} 1. \quad 0 \\ + 8 \\ \hline \end{array}$$

$$\begin{array}{r} 2. \quad 8 \\ + 0 \\ \hline \end{array}$$

$$\begin{array}{r} 3. \quad 4 \\ + 6 \\ \hline \end{array}$$

$$\begin{array}{r} 4. \quad 6 \\ + 4 \\ \hline \end{array}$$

$$\begin{array}{r} 5. \quad 9 \\ + 1 \\ \hline \end{array}$$

$$\begin{array}{r} 6. \quad 1 \\ + 9 \\ \hline \end{array}$$

$$\begin{array}{r} 7. \quad 5 \\ + 3 \\ \hline \end{array}$$

$$\begin{array}{r} 8. \quad 3 \\ + 5 \\ \hline \end{array}$$

$$\begin{array}{r} 9. \quad 7 \\ + 3 \\ \hline \end{array}$$

$$\begin{array}{r} 10. \quad 0 \\ + 5 \\ \hline \end{array}$$

$$\begin{array}{r} 11. \quad 2 \\ + 6 \\ \hline \end{array}$$

$$\begin{array}{r} 12. \quad 8 \\ + 2 \\ \hline \end{array}$$

$$\begin{array}{r} 13. \quad 6 \\ + 0 \\ \hline \end{array}$$

$$\begin{array}{r} 14. \quad 4 \\ + 3 \\ \hline \end{array}$$

$$\begin{array}{r} 15. \quad 3 \\ + 6 \\ \hline \end{array}$$


$$\begin{array}{r} 16. \quad 0 \\ + 4 \\ \hline \end{array}$$

$$\begin{array}{r} 17. \quad 5 \\ + 4 \\ \hline \end{array}$$

$$\begin{array}{r} 18. \quad 9 \\ + 0 \\ \hline \end{array}$$

$$\begin{array}{r} 19. \quad 3 \\ + 4 \\ \hline \end{array}$$

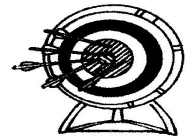
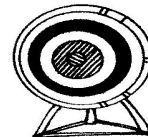
$$\begin{array}{r} 20. \quad 5 \\ + 2 \\ \hline \end{array}$$



Real World Connection

Tell a story. Write two addition sentences.

21. _____ + _____ = _____
_____ + _____ = _____



arrows