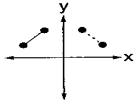


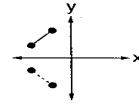
Reflections

A **reflection** makes the mirror image of a figure.
 A **line of reflection** tells how the figure is reflected.

This segment is reflected
 about the vertical (y) axis.

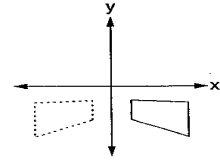
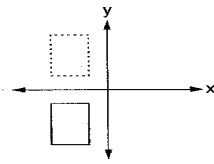
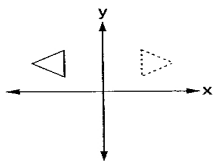


This segment is reflected
 about the horizontal (x) axis.



Decide whether each figure is reflected about the vertical (y) or horizontal (x) axis.
 Circle the x or the y.

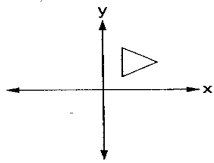
A.



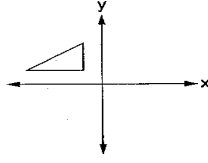
Draw a reflection of the figure about the horizontal or vertical axis as indicated.

B.

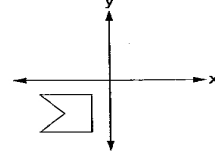
vertical



horizontal

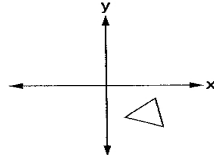


horizontal

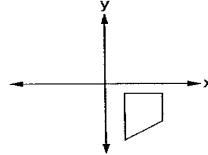


C.

horizontal



vertical



vertical

