


Understanding Elapsed Time with Word Problems

Directions: Read each word problem. Draw the hands on the clocks to show the starting and ending times. Write the times on the lines.


1. Jermaine went to the soccer game. The game began at 2:00 p.m. and lasted 2 hours. What time did the soccer game end?

The soccer game ended at _____

Starting Time




Ending Time




2. Sally played basketball for 1 hour. She began playing at 8:00 a.m. What time did Sally finish playing basketball?

Sally finished playing basketball at _____





3. Herb made a chocolate cake and put it in the oven to bake for an hour. He put the cake in the oven at 4:30 p.m. What time did Herb take the cake out of the oven?

Herb took the cake out of the oven at _____



4. Tya went to a friend's birthday party. The party began at 6:00 p.m. The party lasted 3 hours. What time did the party end?

The party ended at _____



5. Patrick and Emily went to the beach on Saturday. They left their house at 10:00 a.m. If they returned 5 hours later, what time did they return home?

Patrick and Emily came home at _____

