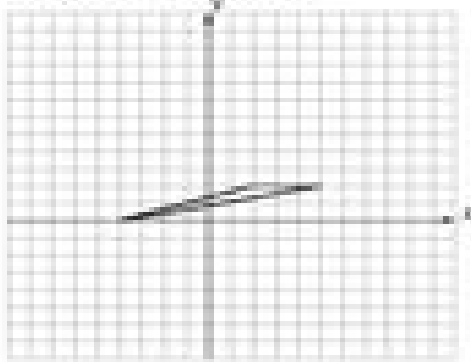


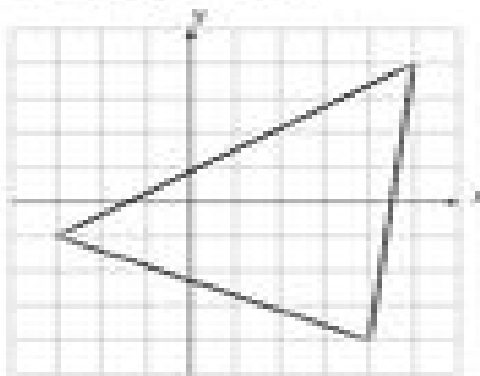
## Dilations (A)

Draw the dilated image.

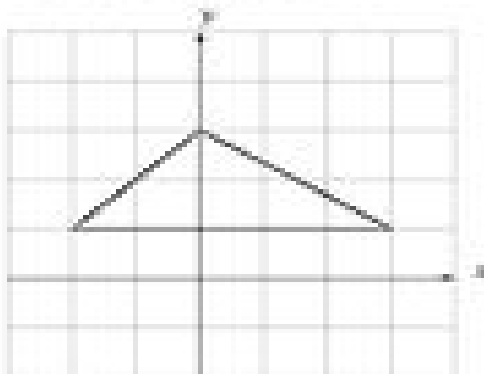
Dilate by 2 using center  $(0, 0)$ .



Dilate by  $\frac{1}{2}$  using center  $(0, 0)$ .



Dilate by  $\frac{1}{2}$  using center  $(0, 0)$ .



Dilate by 2 using center  $(0, 0)$ .

