

Name _____










































Money

Counting coins

A Busy Builder

Count the coins. Write.



A. 	   	_____c
B. 	    	_____c
C. 	     	_____c
D. 	    	_____c
E. 	    	_____c
F. 	     	_____c
G. 	  	_____c

Review: A shovel costs \$1.00. Draw coins (100¢) to equal \$1.00.

©2009 by Pearson Education, Inc. All rights reserved.