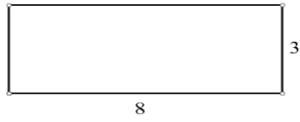


Perimeter & Area Worksheet I

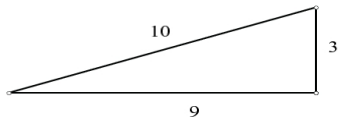
For each of the following plane figures, find the
Assume all units are in cm.

1)



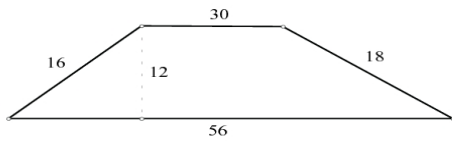
Perimeter & **Area**

2)



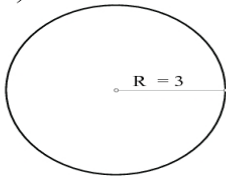
Perimeter & **Area**

3)



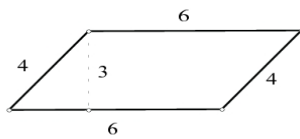
Perimeter & **Area**

4)



Circumference & **Area**

5)



Perimeter & **Area**