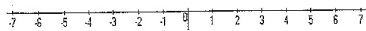


Student Name: _____

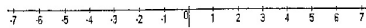
Score: _____

Graph Using Number Line

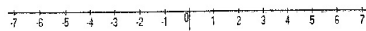
$$x > 4$$



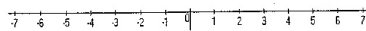
$$x < -2$$



$$x \geq 0$$



$$x > -3$$



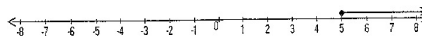
$$x \leq 2$$



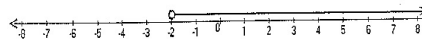
Student Name: _____

Score: _____

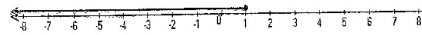
Write the Inequalities for Graphs



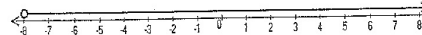
Inequality: _____



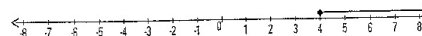
Inequality: _____



Inequality: _____



Inequality: _____



Inequality: _____