

Triangles




Look at these different triangles.




Equilateral
(all sides equal,
is also isosceles)



Isosceles
(two sides equal)



Scalene
(all sides different)



Right angle
(even the isosceles or
scalene, but one angle
must be a right angle)

1



2



3



4




5



6



7



8



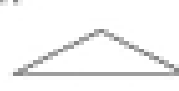
9



10



11



12



List the triangles that are:

Equilateral _____

Isosceles _____

Scalene _____

Right angle _____