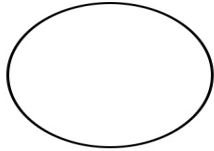


Name: _____

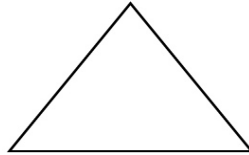
Date: _____

2d Shapes

Name each shape and count how many sides each shape has got.



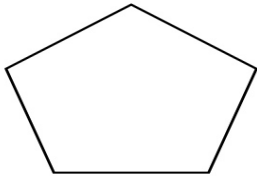
name _____
sides _____



name _____
sides _____



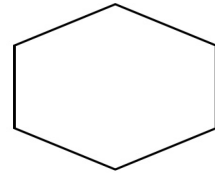
name _____
sides _____



name _____
sides _____



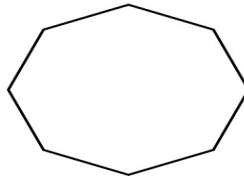
name _____
sides _____




name _____
sides _____



name _____
sides _____



name _____
sides _____



name _____
sides _____