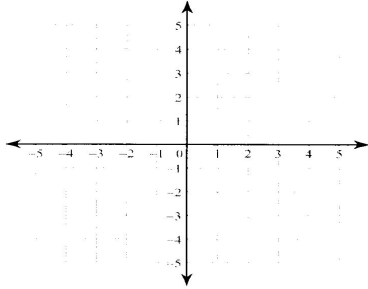
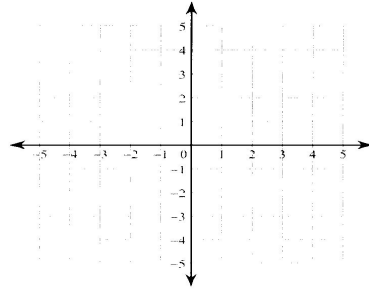


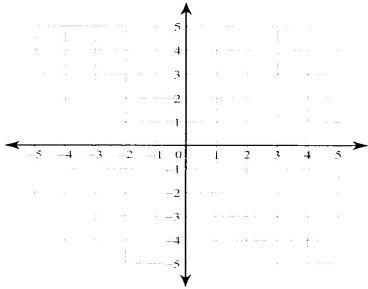
$$13) \begin{aligned} y &= -\frac{5}{3}x - 1 \\ y &= -\frac{1}{3}x + 3 \end{aligned}$$



$$14) \begin{aligned} y &= -\frac{2}{3}x + 3 \\ y &= \frac{4}{3}x - 3 \end{aligned}$$



$$15) \begin{aligned} y &= -2x - 4 \\ y &= 3x + 1 \end{aligned}$$



$$16) \begin{aligned} y &= \frac{5}{2}x - 4 \\ y &= -x + 3 \end{aligned}$$

