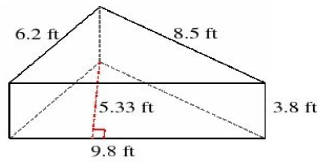


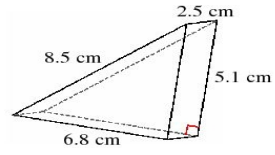
## Volume and Surface Area of Triangular Prisms (A)

Instructions: Find the volume and surface area for each triangular prism.

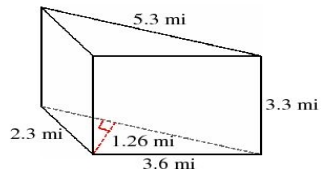
1)



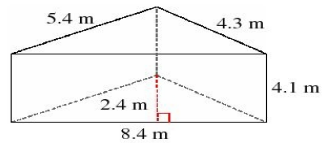
2)



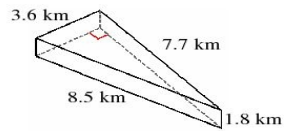
3)



4)



5)



6)

