

Name _____

Place Value

Tens and ones to 50

Gathering Eggs

Write how many tens and ones.








Write the number.

Key

 = 1 egg  = 10 eggs



Beak! Use the key to show the number 25. Write the number of tens and ones.

	tens	ones	
A. 			_____
B. 			_____
C. 			_____
D. 			_____
E. 			_____
F. 			_____
G. 			_____