


Name: \_\_\_\_\_


Date: \_\_\_\_\_

# Telling Time to the Hour


Directions: Write the correct time




\_\_\_\_\_




\_\_\_\_\_




\_\_\_\_\_




\_\_\_\_\_




\_\_\_\_\_



\_\_\_\_\_



\_\_\_\_\_



\_\_\_\_\_