

Name: _____

Date: _____

Telling Time


Draw the hands on the clock to show the time.

a.




11:30

b.




4:30

c.




7:30

d.



5:30

e.



6:30

f.




10:30

g.



12:30

h.



2:30

i.



3:30