

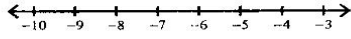
Name \_\_\_\_\_

### Solving One-Step Inequalities by Multiplying/Dividing

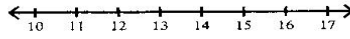
Period \_\_\_\_\_

Solve each inequality and graph its solution.

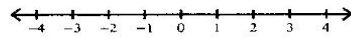
1)  $-5x \geq 25$



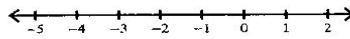
2)  $\frac{n}{4} \leq 3$



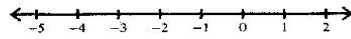
3)  $2n > 2$



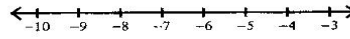
4)  $\frac{n}{4} \leq -\frac{1}{4}$



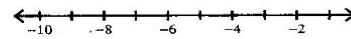
5)  $-3x > 0$



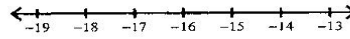
6)  $\frac{m}{4} \leq -2$



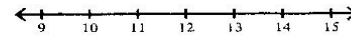
7)  $-3n > 15$



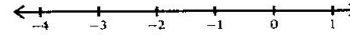
8)  $-3v > 45$



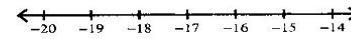
9)  $8a < 96$



10)  $10b \leq -10$



11)  $\frac{b}{6} > -3$



12)  $\frac{x}{5} \leq 3$

