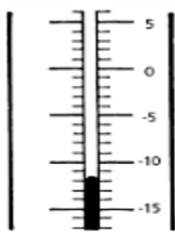
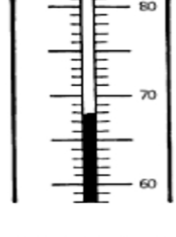

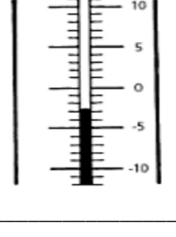


Name: _____

Measuring Temperature

Directions: Read each thermometer below. Write the correct temperature on the line underneath each thermometer.

<p>1. </p> <p>_____</p>	<p>2. </p> <p>_____</p>
<p>3. </p> <p>_____</p>	<p>4. </p> <p>_____</p>