

Name : \_\_\_\_\_

Score : \_\_\_\_\_

Teacher : \_\_\_\_\_

Date : \_\_\_\_\_

What is the Fraction of the Shaded Area ?



\_\_\_\_\_



\_\_\_\_\_



\_\_\_\_\_



\_\_\_\_\_



\_\_\_\_\_



\_\_\_\_\_



\_\_\_\_\_



\_\_\_\_\_



\_\_\_\_\_



\_\_\_\_\_

Shade the Figure with the Indicated Fraction.




$\frac{1}{4}$



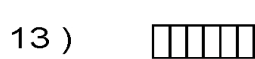
$\frac{2}{6}$




$\frac{6}{8}$



$\frac{2}{5}$



$\frac{1}{6}$




$\frac{4}{8}$




$\frac{3}{4}$



$\frac{3}{8}$



$\frac{2}{4}$



$\frac{1}{5}$