

Name _____

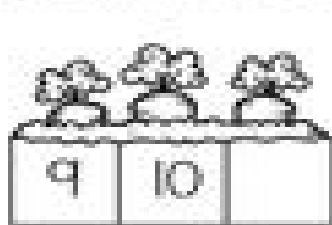
Date _____

Missing Number Math

Fill in the blank with the missing number



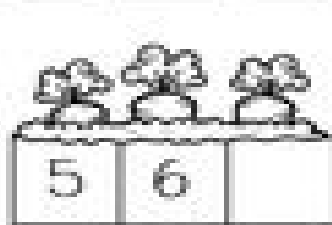
1 2




9 10




4 5



5 6



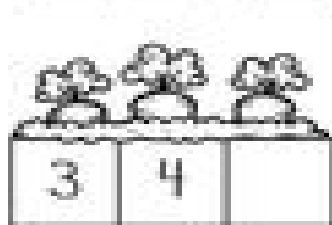
12 13



8 9




17 18



3 4



14 15



11 12



6 7



18 19