

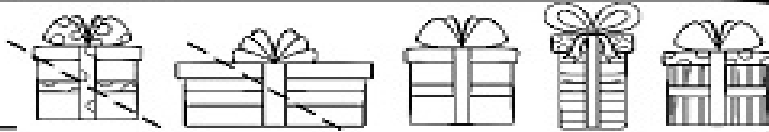


Name \_\_\_\_\_

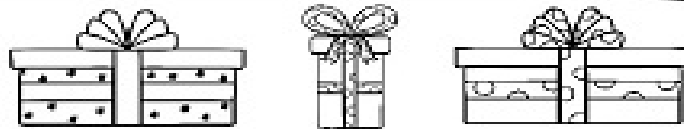
# Winter Subtraction

Directions: Use the pictures to solve the problems.

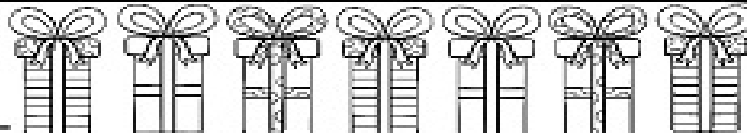
$5 - 2 = \underline{\quad}$



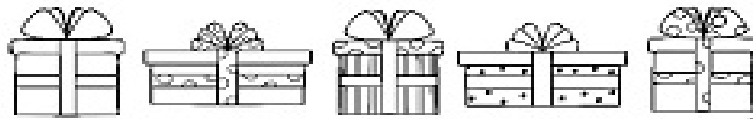
$3 - 2 = \underline{\quad}$



$7 - 4 = \underline{\quad}$



$5 - 3 = \underline{\quad}$



$6 - 2 = \underline{\quad}$



$4 - 1 = \underline{\quad}$

