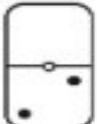
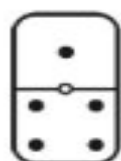


Domino Dot Addition

Worksheet 1

Write an addition equation to represent the dots in the top section and the dots in the bottom section of each domino.

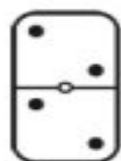
Example.  $\overset{\text{Dots in top section.}}{\underline{0}} + \underset{\text{Dots in bottom section.}}{\underline{2}} = \underline{2}$ Total of all dots.



_____ + _____ = _____



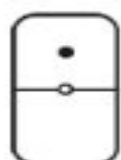
_____ + _____ = _____



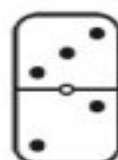
_____ + _____ = _____



_____ + _____ = _____



_____ + _____ = _____



_____ + _____ = _____