

Name : _____

Score : _____

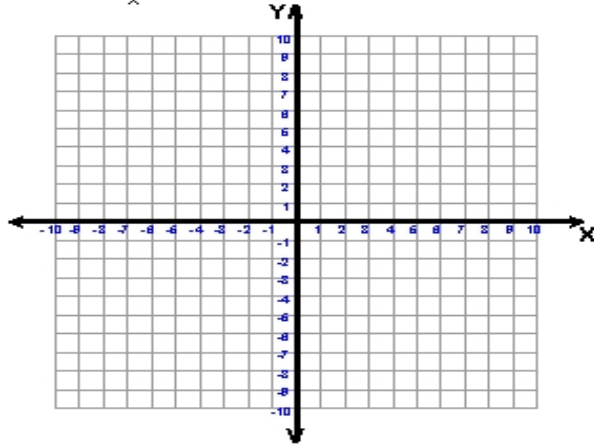
Teacher : _____

Date : _____

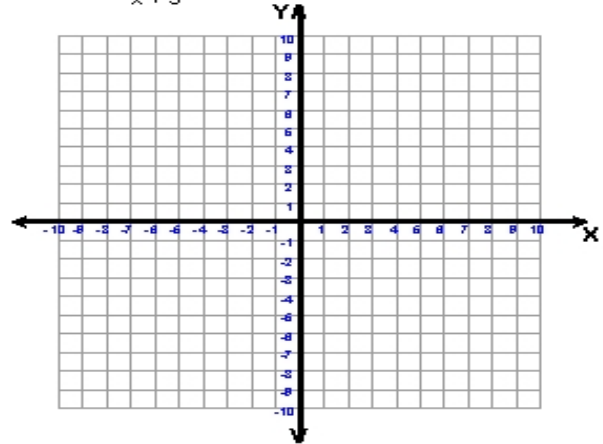
Graphing Simple Rational Functions

Graph the given function

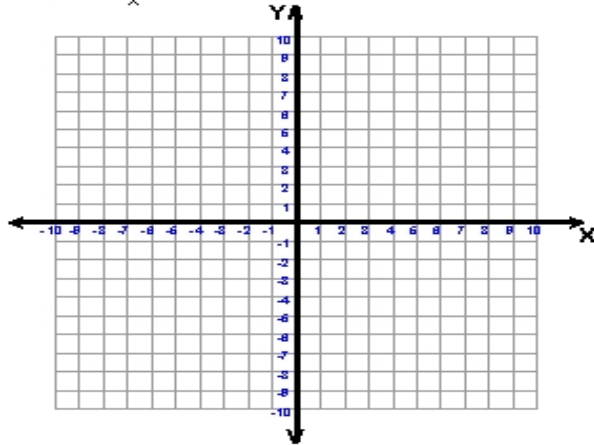
9) $f(x) = \frac{1}{x}$



10) $f(x) = \frac{-2}{x+3}$



11) $f(x) = \frac{2}{x}$



12) $f(x) = \frac{-2}{x-2} + 2$

