

Name : _____

Score : _____

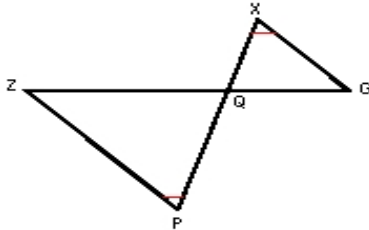
Teacher : _____

Date : _____

Similar Right Triangles

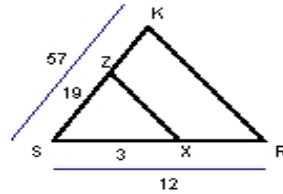
State if each triangle pair is similar. If so, state the similarity type and name the similar triangle.

1)



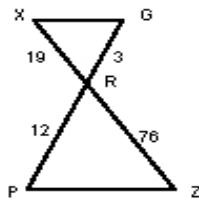
$\triangle GQX \sim$ _____

2)



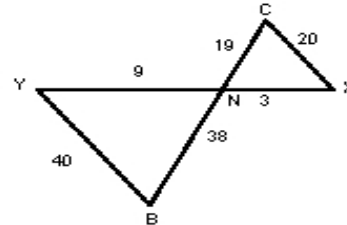
$\triangle RSK \sim$ _____

3)



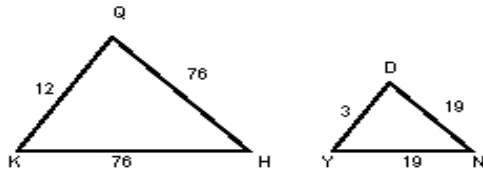
$\triangle GRX \sim$ _____

4)



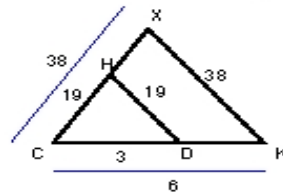
$\triangle XNC \sim$ _____

5)



$\triangle QKH \sim$ _____

6)



$\triangle KCX \sim$ _____

