

Name : _____

Score : _____

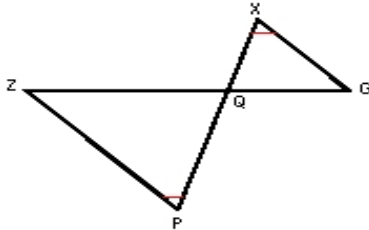
Teacher : _____

Date : _____

Similar Right Triangles

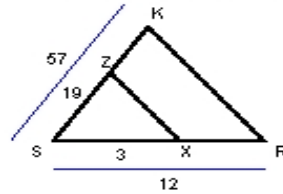
State if each triangle pair is similar. If so, state the similarity type and name the similar triangle.

1)



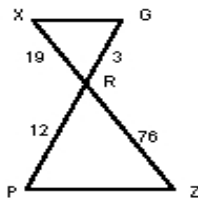
$\triangle ZQP \sim$ _____

2)



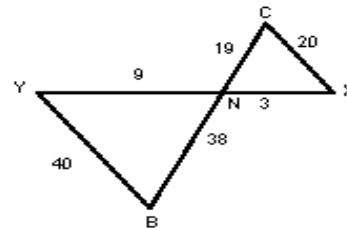
$\triangle SKR \sim$ _____

3)



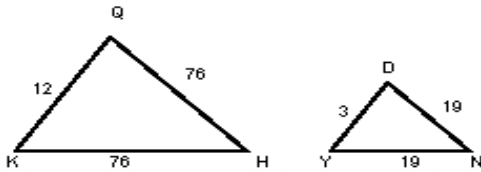
$\triangle XRG \sim$ _____

4)



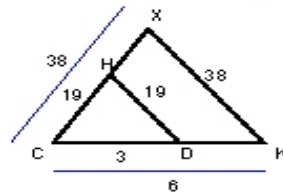
$\triangle YNB \sim$ _____

5)



$\triangle QKH \sim$ _____

6)



$\triangle CKX \sim$ _____

