

Quadrilaterals Quiz

1. What two important characteristics do ALL quadrilaterals have?

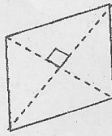
- a) 4 sides
 b) 4 angles that add up 360°

2. Name each shape using the following terms. You may use a term more than once and you do not have to use every term.


trapezoid
 parallelogram

rectangle
 rhombus

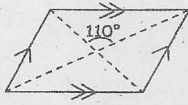
square
 kite



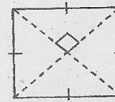
a) rhombus



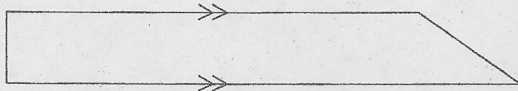
b) rectangle



c) parallelogram



d) square



e) trapezoid



f) rhombus