
















Earth Math Machine 4!

Name : _____ Date: _____

When the number on top goes through the Earth Math Machine add 10.
Write the sum underneath. Check out the example to the right:

 22 +10 	 51 +10 	 58 +10 	 33 +10 	 5 +10 15
 26 +10 	 28 +10 	 57 +10 	 38 +10 	 50 +10
 60 +10 	 56 +10 	 32 +10 	 46 +10 	 48 +10