









Name: _____

Chinese Dominoes

Found in China, the oldest domino sets date from around 1120 AD. Use the dominoes to write the addition sentence and answer.



					
<input type="text" value="6"/>	+	<input type="text" value="2"/>	=	<input type="text" value="8"/>	
					
<input type="text"/>	+	<input type="text"/>	=	<input type="text"/>	
					
<input type="text"/>	+	<input type="text"/>	=	<input type="text"/>	
					
<input type="text"/>	+	<input type="text"/>	=	<input type="text"/>	

					
<input type="text"/>	+	<input type="text"/>	=	<input type="text"/>	
					
<input type="text"/>	+	<input type="text"/>	=	<input type="text"/>	
					
<input type="text"/>	+	<input type="text"/>	=	<input type="text"/>	
					
<input type="text"/>	+	<input type="text"/>	=	<input type="text"/>	