



How many **groups** of 10 blocks are in each set?



groups



groups



groups


How many **groups** of 1 blocks are in each set?



groups




groups



groups




groups



groups

groups

total




groups



groups

total



groups



groups

total