

Name : _____

Score : _____

Teacher : _____

Date : _____

Find the missing angle measurement in each set of supplementary angles.

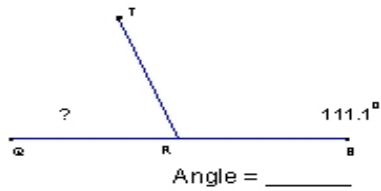
1)



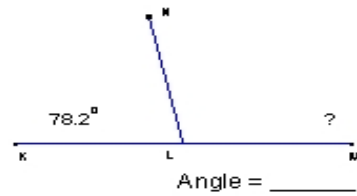
2)



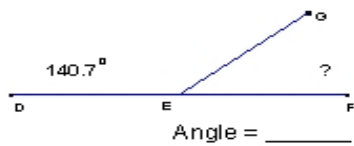
3)



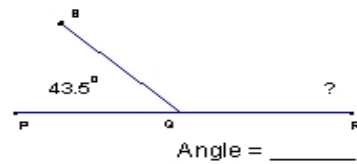
4)



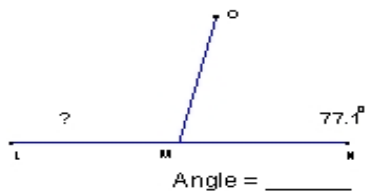
5)



6)



7)



8)

