





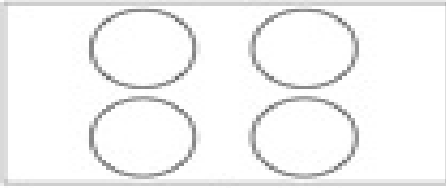
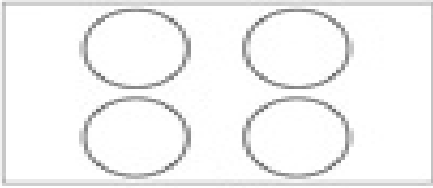





Name: \_\_\_\_\_

## Picture Addition

Count, add and write the correct number in the box.

 <b>1</b>	<b>+</b>	 <b>1</b>	<b>=</b>	
 <b>2</b>	<b>+</b>	 <b>1</b>	<b>=</b>	
 <b>4</b>	<b>+</b>	 <b>4</b>	<b>=</b>	
 <b>5</b>	<b>+</b>	 <b>2</b>	<b>=</b>	