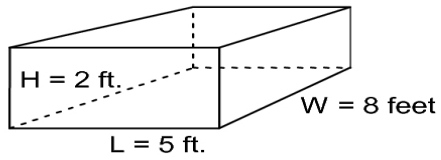


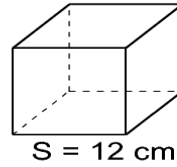
Volume Worksheet I
Find the VOLUME of each of the following Solids

Rectangular Solid



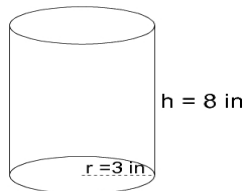
1) FORMULA:
VOLUME =

Cube



2) FORMULA:
VOLUME =

Cylinder



Cone

