

Name : _____

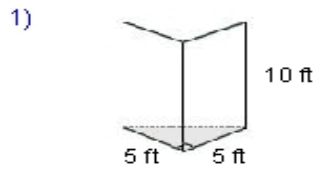
Score : _____

Teacher : _____

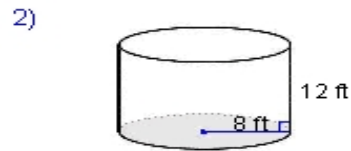
Date : _____

Volume of Prisms and Cylinders

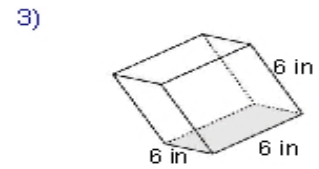
Find the volume for each figure. Round your answers to the nearest hundredth, if necessary.



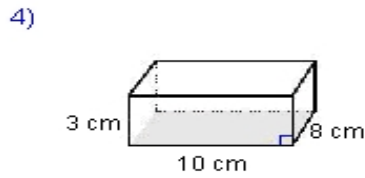
Volume: _____



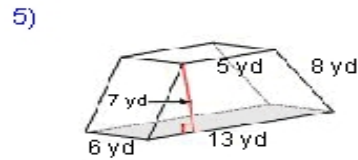
Volume: _____



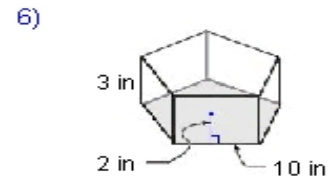
Volume: _____



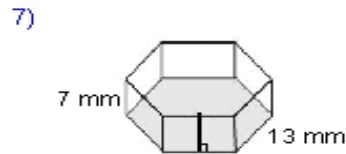
Volume: _____



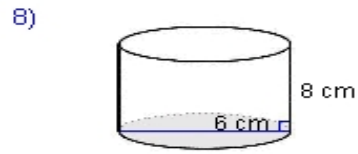
Volume: _____



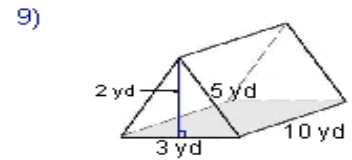
Volume: _____



Volume: _____



Volume: _____



Volume: _____

