






Name \_\_\_\_\_

Temperature  
Comparing temperature

## Highs and Lows

Write each temperature.



A. \_\_\_\_°F

B. \_\_\_\_°F

C. \_\_\_\_°F

D. \_\_\_\_°F

E. \_\_\_\_°F

Write warmer or cooler on each line to make the sentences true.

1. Temperature D is \_\_\_\_\_ than temperature C.
2. Temperature E is \_\_\_\_\_ than temperature B.
3. Temperature B is \_\_\_\_\_ than temperature A.
4. Temperature C is \_\_\_\_\_ than temperature B.
5. Temperature A is \_\_\_\_\_ than temperature C but \_\_\_\_\_ than temperature E.
6. Temperature E is \_\_\_\_\_ than temperature B but \_\_\_\_\_ than temperature A.
7. Temperature D is \_\_\_\_\_ than temperature E and \_\_\_\_\_ than temperature A.
8. Temperature A is \_\_\_\_\_ than temperature D and \_\_\_\_\_ than temperature C.

Review Use the temperatures from warmest to coolest.

© The McGraw-Hill Companies, Inc.