


Symmetry



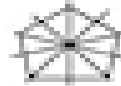
How many lines of symmetry does each figure have?



1



2



8




0

Is the dashed line a line of symmetry? Write yes or no.









Draw the lines of symmetry. Write how many there are.







Draw the lines of symmetry. Write how many there are.







Draw the lines of symmetry. Write how many there are.

