


Draw a circle around groups of tens. Write the number of tens and the number of ones on the lines below.

Example




  2   tens        3   ones

a.




           tens                 ones

b.



           tens                 ones

c.



           tens                 ones