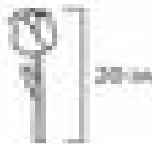


# Measurement: Converting Feet & Inches

**Example:** How tall is the tulip?



$$20 \text{ in} = 7 \text{ ft}$$

How many feet will it take to get to the top of the tulip? (Please convert all units to feet.)

$$\begin{array}{r} 1 \text{ ft} \\ \underline{12 \text{ in}} \\ 20 \text{ in} \\ \hline 8 \text{ in} \end{array}$$

$$\text{Answer: } 1 \text{ ft } 8 \text{ in.}$$

Please convert the following heights. Be sure to show your work!

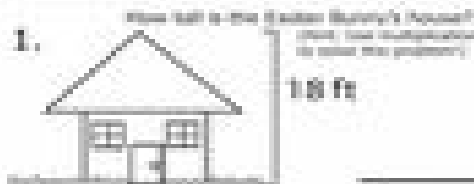
**Conversion Key**

$$12 \text{ inches} = 1 \text{ foot}$$

$$\text{inches} = \text{in}$$

$$\text{feet} = \text{ft}$$

1.




\_\_\_\_\_ in

2.



\_\_\_\_\_ ft \_\_\_\_\_ in

3.



\_\_\_\_\_ in

4.



\_\_\_\_\_ ft \_\_\_\_\_ in

5.



\_\_\_\_\_ in

**Bonus:**

If the Easter Bunny is 7 ft 2 in tall from his head to his feet, how many inches are his ears?

\_\_\_\_\_ in

