




Name _____

Date _____

Representing Division

Grouping Model	Repeated Subtraction
<p>Equation</p> $18 \div 3 =$	
Array	Number Line

<p>Grouping Model</p>  <p>Division Equation _____</p>	<p>Repeated Subtraction</p> $24 - 4 - 4 - 4 - 4 - 4 - 4 - 4 = 0$ <p>Division Equation _____</p>
<p>Array</p>  <p>Division Equation _____</p>	<p>Number Line</p>  <p>Division Equation _____</p>