













Name \_\_\_\_\_

Date \_\_\_\_\_

# Before & After Math

Fill in the blanks with the missing numbers

 <table border="1"><tr><td></td><td>72</td><td></td></tr></table>		72		 <table border="1"><tr><td></td><td>60</td><td></td></tr></table>		60		 <table border="1"><tr><td></td><td>9</td><td></td></tr></table>		9	
	72										
	60										
	9										
 <table border="1"><tr><td></td><td>20</td><td></td></tr></table>		20		 <table border="1"><tr><td></td><td>89</td><td></td></tr></table>		89		 <table border="1"><tr><td></td><td>51</td><td></td></tr></table>		51	
	20										
	89										
	51										
 <table border="1"><tr><td></td><td>17</td><td></td></tr></table>		17		 <table border="1"><tr><td></td><td>42</td><td></td></tr></table>		42		 <table border="1"><tr><td></td><td>36</td><td></td></tr></table>		36	
	17										
	42										
	36										
 <table border="1"><tr><td></td><td>99</td><td></td></tr></table>		99		 <table border="1"><tr><td></td><td>29</td><td></td></tr></table>		29		 <table border="1"><tr><td></td><td>3</td><td></td></tr></table>		3	
	99										
	29										
	3										